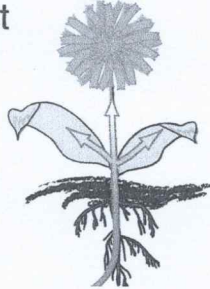


Name: _____ Date: _____ Class: _____


- 1 A plant's _____ carries the water and nutrients that are taken in by the plant's roots to the rest of the plant.

- A roots
- B stem
- C flower
- D leaves




- 2 Plant _____ have many jobs. One job is to **take in sunshine**, which the plant needs to make food and to live.

- A leaves
- B stems
- C roots
- D root hairs




- 3 What do **leaves** have in them which allow air and water to move in and out of the plant?

- A tiny cuts
- B big pockets
- C large stripes
- D small openings



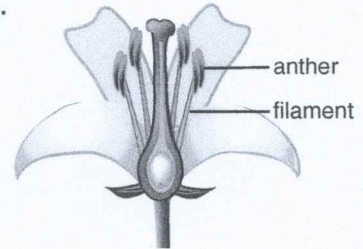
- 4 The main job of the _____ of a plant is to **make seeds**. New plants grow from seeds.

- A flower
- B stem
- C leaves
- D roots



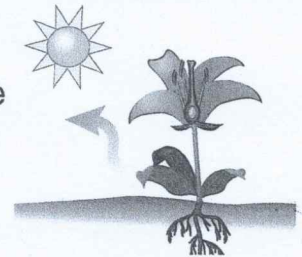
- 5 The _____ of a flower is made up of two main parts: the **anther** and the **filament**.

- A stamen
- B petals
- C ovary
- D style



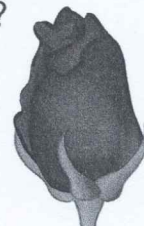
- 6 What do plants release into the air during the process of **photosynthesis**?

- A oxygen
- B carbon dioxide
- C water
- D helium



- 7 What part of a flower looks like **small leaves surrounding the bud of a flower** and protects a developing flower before it blooms?

- A filaments
- B stigmas
- C sepals
- D petals



- 8 What is the very thin structure that holds up the **anther**?

- A stamen
- B petals
- C filament
- D style

